

Telling the time

Write the time shown on the clock face.




quarter past 8

2




4




1




3



5



Write each time as it would appear on a digital clock.




5:15


7



9




6



8




10




I am confident with telling the time to the quarter hour on analogue and digital clocks.

Write each time as a digital time.




8:15

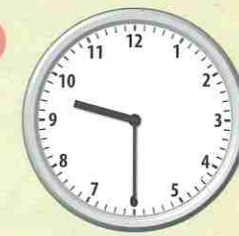
2




4




6




1




3



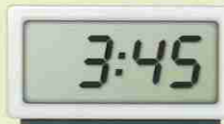
5



7



Write each time as an analogue time in words. Draw the time onto a clock face.



quarter to 4

8




10



12



9



9



11



13



THINK

What time of day could each of these be?



I am confident with telling the time to the quarter hour on analogue and digital clocks.